

# Life Insurance Corporation Of India (LIC) Assistant Development Officers' Recruitment Exam

July 2008 Question Paper (Fully Solved)

## REASONING ABILITY

1. A man facing North turns 135 degrees in the anti-clockwise direction and then 180 degrees in the clockwise direction. Which direction does he face now?

- (A) North-East
- (B) North-West
- (C) South
- (D) West

2. In a certain code RETAIL is written as UFSBJM, how is EXPECT written in that code?

- (A) FQYFDU
- (B) YFUDF
- (C) FYQFDU
- (D) QYFFDU

3. Which one set of letters when sequentially placed at the gaps in the given letters series shall complete it?

aac \_ bba \_ baa \_ cb \_

- (A) bacbc
- (B) abaac
- (C) cabcb
- (D) bcacb

4. What will be the correct sequence of the following words in a dictionary?

- (1) PARTITION
- (2) PASSION
- (3) PARLOUR
- (4) PARTICIPATE
- (5) PARTICLE

The correct sequence of the words is:

- (A) 4, 1, 3, 2, 5
- (B) 3, 4, 5, 1, 2
- (C) 1, 5, 2, 4, 3
- (D) 2, 3, 1, 5, 4

5. In the following questions a group of letters is given. Each letter bears a serial number (1, 2, 3, ...). Four combinations of the serial numbers are then given. Select that combination which would form a meaningful word.

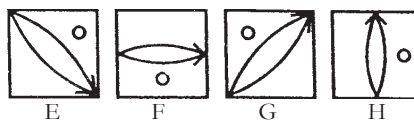
- (1) D                      (2) I
- (3) F                      (4) E
- (5) R                      (6) N

The arrangement of serial numbers of the given letters which would bring out a meaningful word would be:

- (A) 1, 4, 3, 5, 6, 2
- (B) 3, 5, 2, 4, 6, 1
- (C) 4, 2, 1, 3, 6, 5
- (D) 5, 3, 1, 2, 4, 6

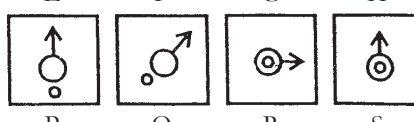
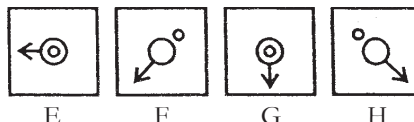
**Directions (Qs. 6 & 7) :** In each of these questions, four figures E, F, G, H are given. Which among the figures P, Q, R, S given below to them can continue the series E, F, G, H?

6.



- (A) P                      (B) Q
- (C) R                      (D) S

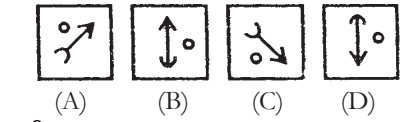
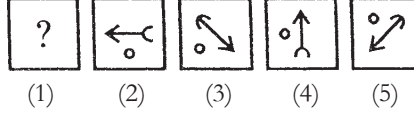
7.



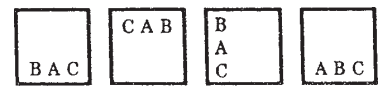
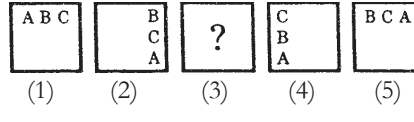
- (A) P                      (B) Q
- (C) R                      (D) S

**Directions (Qs. 8 and 9) :** In question figures, 1, 2, 3, 4 and 5 constituting a continuous series with a gap marked (?) are given. Which among the figures given below, marked (A), (B), (C) and (D) can fill in the gap?

8.



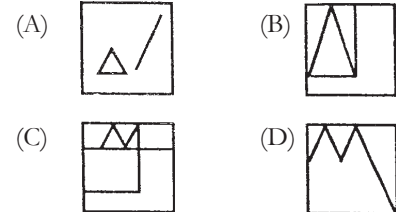
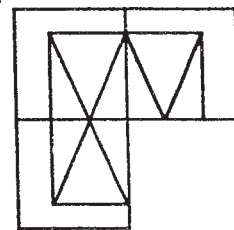
9.



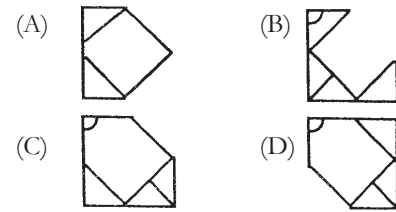
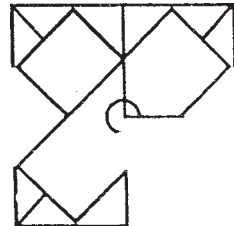
- (A)                      (B)                      (C)                      (D)

**Directions (Qs. 10 and 11) :** In these questions, an incomplete figure is given on the left hand side. Which of the four small figures given below, marked (A), (B), (C) and (D) can complete the given incomplete figure?

10.



11.



**Directions (Qs. 12 and 13) :** In each of these questions, figure drawn on a transparent paper is given below which form from among the four figures marked (A), (B), (C) and (D)