

SPECIAL FEATURE


# SSC Combined Matric Level (Preliminary) Exam

## 2006 Question Papers (Fully Solved)

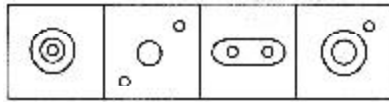
### PART I : GENERAL INTELLIGENCE

1. Which one of the following diagrams represents water, salt and sugar ?

Question Figures :



Answer Figures :



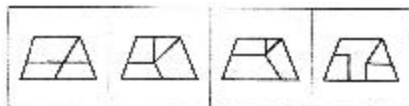
(A)      (B)      (C)      (D)

2. Among the four answer figures, which one can be formed from the cutout pieces given below ?

Question Figure :



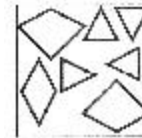
Answer Figures :



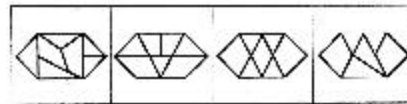
(A)      (B)      (C)      (D)

3. In which answer figure the specified components of the question figure are found ?

Question Figure :



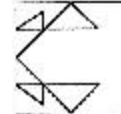
Answer Figures :



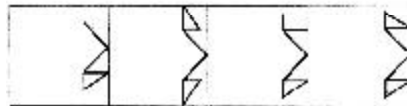
(A)      (B)      (C)      (D)

4. Which one of the answer figures shall complete the given question figure ?

Question Figure :



Answer Figures :



(A)      (B)      (C)      (D)

5. In the following question, which of the alternatives (A), (B), (C) and (D) will exactly make up the key figure given in the question ?